

Chapter Test, Form 2B

What time did each activity take place? Circle the answer.



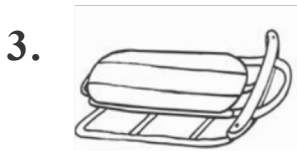
- A. 2:45 A.M.
- B. 2:45 P.M.
- C. 9:15 A.M.
- D. 9:15 A.M.

We went fishing.




- F. 6:45 A.M.
- G. 6:45 P.M.
- H. 8:30 A.M.
- I. 8:30 P.M.

We went to bed.



- A. 2:15 A.M.
- B. 2:15 P.M.
- C. 3:10 A.M.
- D. 3:10 P.M.


We went sledding.




- F. 10:20 A.M.
- G. 10:20 P.M.
- H. 4:50 A.M.
- I. 4:50 P.M.

We played baseball.


Read the time. Then write the time.



_____ : _____



_____ : _____















_____ : _____





Chapter Test, Form 2B *(continued)*

Read the time. Then draw the minute hand to show the time.

8.			9.			10.		
11.			12.			13.		

What time is shown on each clock? Circle the answer.

14.		15.	
<p>A. quarter til 6 B. quarter til 7 C. quarter past 6 D. quarter past 7</p>		<p>F. half past 5 G. half past 6 H. quarter til 5 I. quarter past 6</p>	
<p>16. Amber's family went biking at 2:15. They biked for 1 hour. Then they stopped to play at a park for 2 hours. What time did they finish playing?</p> <p>A. quarter til 5 B. quarter past 5 C. quarter past 4 D. quarter til 4</p>		<p>17. Carson is at home. He is going swimming at 1:45. He has 4 hours to wait. What time is it now?</p> <p>F. quarter til 9 G. quarter past 9 H. quarter til 10 I. quarter past 10</p>	

