



Name _____

My Review

Chapter 10

Time

Vocabulary Check



Complete each sentence.

hour

half hour

quarter hour

minute

A.M.

P.M.

digital

analog

1. The long hand on an analog clock is the _____ hand.
2. The short hand on an analog clock is the _____ hand.
3. 15 minutes is a _____.
4. 30 minutes is a _____.
5. A clock that uses hands to show the time is an _____ clock.
6. A clock that uses numbers to show the time is a _____ clock.
7. The hours from noon to midnight are _____.
8. The hours from midnight to noon are _____.

Concept Check



Read the time. Write the time.

9.



10.




11.




Tell what time is shown. Draw the hands on each clock.


12.



13.



14.



Circle the best choice.

15. Walk the dog. 11:45 A.M. P.M.

16. Go hiking. 2:30 A.M. P.M.

17. Wash dinner dishes. 6:30 A.M. P.M.




Name _____



Problem Solving

18. On a clock, the hour hand is between the 2 and 3. The minute hand is on the 5. What time is it? Show the time on both clocks.



Brain Builders

19. The time is 9:00 A.M. In 6 hours and 5 minutes, Greg will leave school. What time will it be? Circle A.M. or P.M.



_____ A.M. P.M.

20. Derek has basketball practice at 2:30. Luke has practice two and a quarter hours later. Show the times on the clocks. Write the time and circle A.M. or P.M.

Derek



A.M.

P.M.

Luke



A.M.

P.M.

21. **Test Practice** The boat picked up passengers every half hour. If the first boat arrives at 8:00 A.M., when will the fourth boat arrive?

12:00 P.M.



10:00 A.M.



9:30 A.M.



10:30 A.M.

